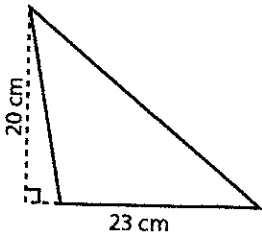
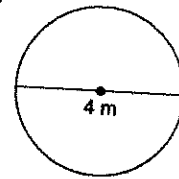

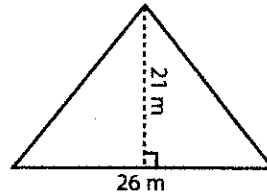
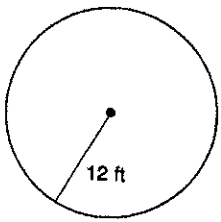


# Area 1

Name: \_\_\_\_\_

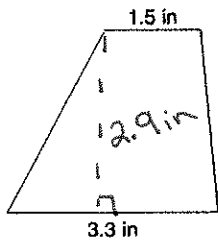
Find the area of each shape. Make sure you write the formula + then evaluate. Show ALL work + round to the nearest tenth if necessary.



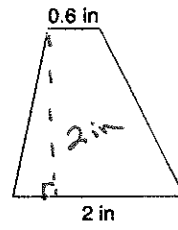
Name \_\_\_\_\_

Date \_\_\_\_\_ Period \_\_\_\_\_

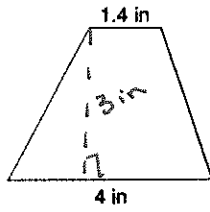
1)



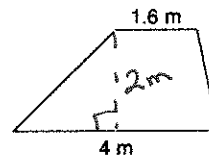
2)



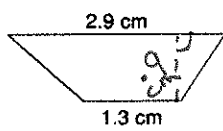
3)



4)



5)



6)

