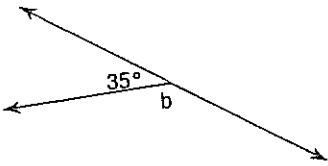


# Angle Relationships Worksheet #5

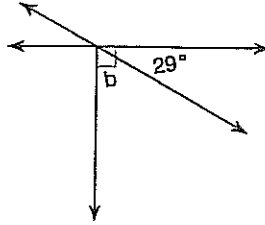
Name: \_\_\_\_\_ Date: \_\_\_\_\_ Period: \_\_\_\_\_

Algebraically solve for the unknown angle on each diagram. Use all the angle relationships you have learned to figure out how to solve these problems.

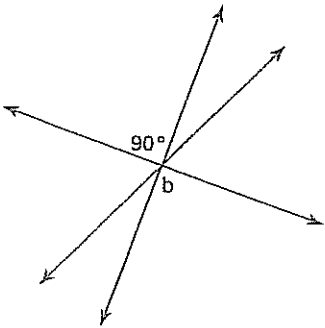
1.



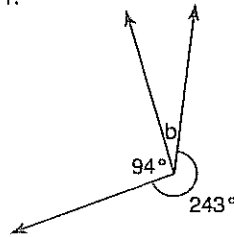
2.



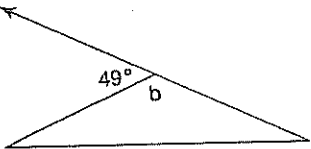
3.



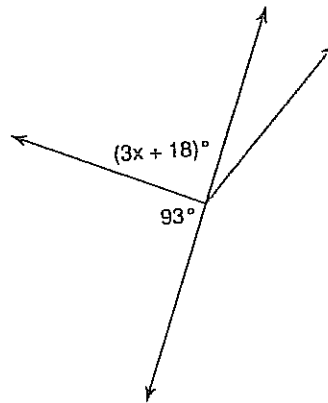
4.



5.

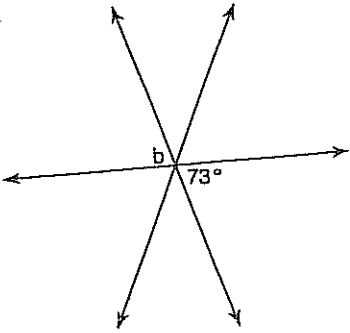


6.

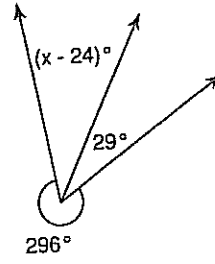


Algebraically solve for the unknown angle on each diagram. Use all the angle relationships you have learned to figure out how to solve these problems.

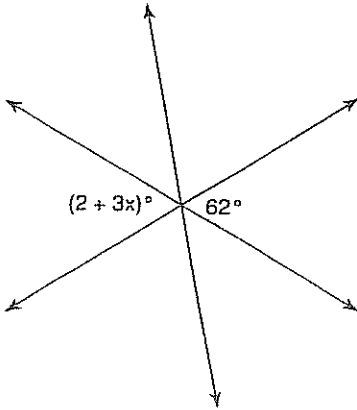
7.



8.



9.



10.

